

Name:

14

15

16

Teacher:

Period:

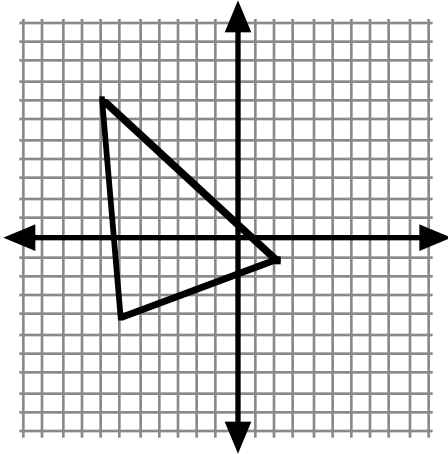
Date:

# Test #18

## Show All Work For Credit

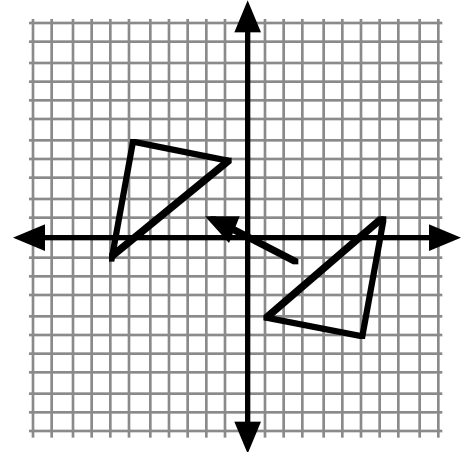
14) Transformations:

a) Draw:  $(x, y) \rightarrow (x + 1, -y)$

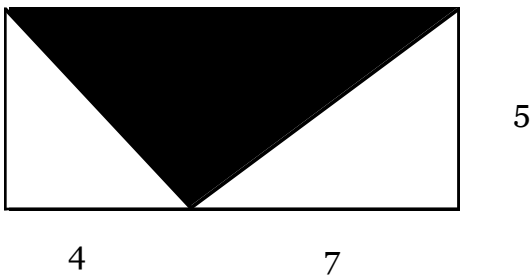


b) Fill in the translation:

$(x, y) \rightarrow ( \quad , \quad )$



15) Triangles: Find the shaded area.



16) Trapezoids: Find the area of the trapezoid.

